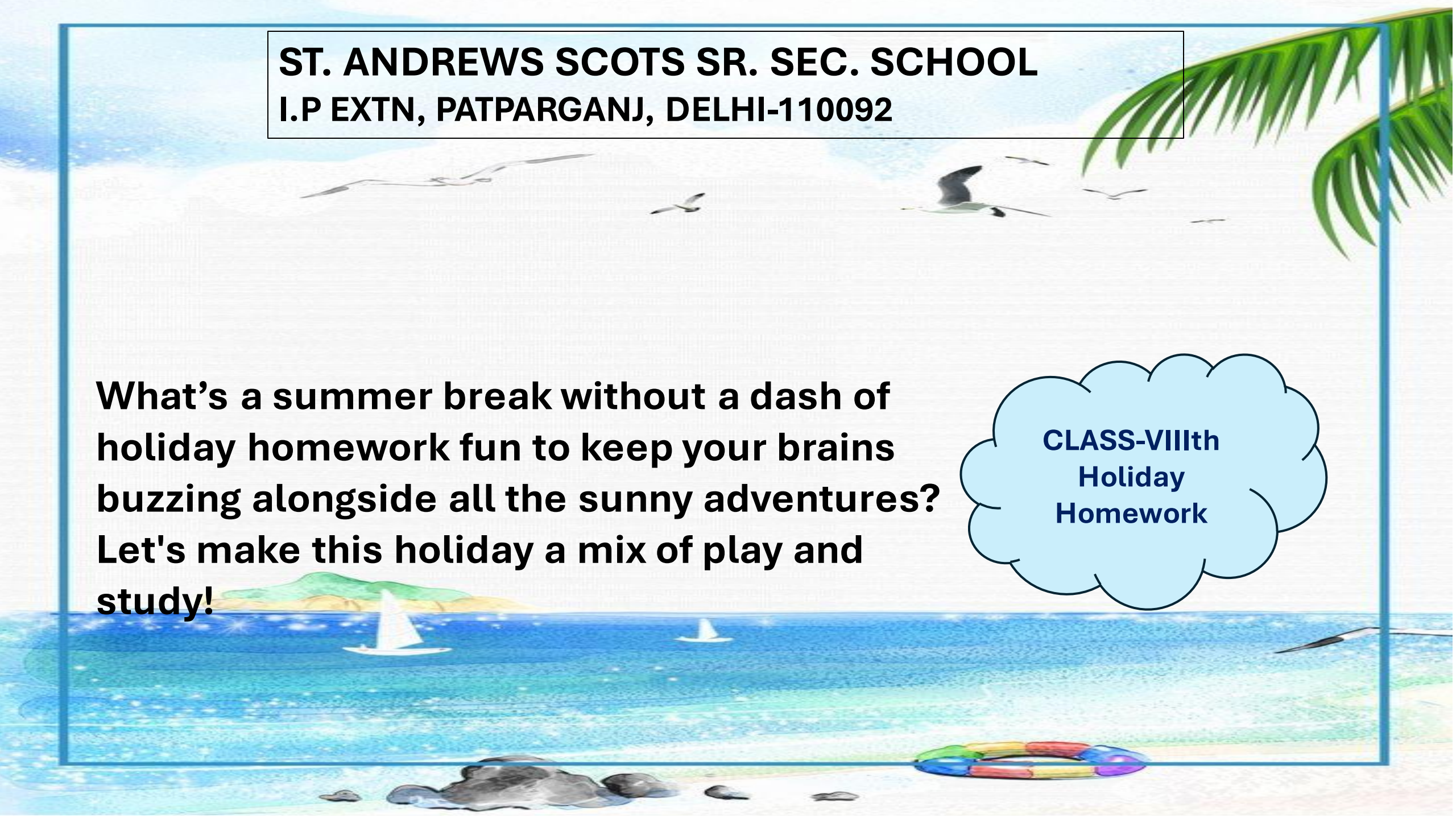


ST. ANDREWS SCOTS SR. SEC. SCHOOL
I.P EXTN, PATPARGANJ, DELHI-110092

What's a summer break without a dash of holiday homework fun to keep your brains buzzing alongside all the sunny adventures? Let's make this holiday a mix of play and study!

**CLASS-VIIIth
Holiday
Homework**





Note:- Holiday Homework carries marks; hence submission of the work is compulsory for all the students.

1. Written Homework of all the subjects is to be done as per the given instructions.
2. The Holiday work must be done in a very neat and presentable manner.
3. The child will be assessed for the handwriting, presentation, neatness and completion of all the given questions.

हिंदी

ग्रीष्मकालीन अवकाश:

- १) सौर ऊर्जा से चलने वाले उपकरणों के चित्र बनाकर नाम लिखिए।
- २) हमारे मुख्य चार वेद हैं, उनके नाम लिखकर उनके बारे में संक्षेप में लिखिए।
- ३) पाठ. 'मछलियों का अनोखा संसार' की सहायता से समुद्री जीवों के चित्र बनाइए या चिपकाइए।
- ४) 'योग भगाए रोग' के आधार पर सूर्य नमस्कार के क्रमानुसार चित्र बनाइए या चिपकाए।

हिंदी

- ५) संयुक्ताक्षर वाले किन्हीं 10 शब्दों का वर्ण-विच्छेद कीजिए।
- ६) निम्नलिखित विषयों पर अनुच्छेद व्याकरण कॉपी में लिखिए:
- क) विद्यालयी बच्चों की सुरक्षा
(पृष्ठ संख्या 312)
- ख) मेक इन इंडिया (पृष्ठ संख्या 318)
- ७) कक्षा कार्य याद कीजिए।

नोट : प्रश्न १ से ५ तक A4 साइज शीट (A4 size sheet) पर कीजिए।

A decorative border surrounds the central text area. It features large, colorful letters from A to Z, each accompanied by a cartoon illustration of an animal or creature. For example, 'A' is green with a crocodile, 'B' is yellow with a bear, 'C' is orange with a giraffe, 'D' is orange with a duck, 'E' is black with an elephant, 'F' is orange with a fox, 'G' is orange with a giraffe, 'H' is brown with a horse, 'I' is green with an iguana, 'J' is blue with a jellyfish, 'K' is brown with a kangaroo, 'L' is brown with a lion, 'M' is brown with a monkey, 'N' is red with a bird, 'O' is brown with an owl, 'P' is orange with a pig, 'Q' is brown with a quail, 'R' is orange with a rabbit, 'S' is orange with a snake, 'T' is pink with a unicorn, 'U' is green with a unicorn, 'V' is brown with a vulture, 'W' is blue with a whale, 'X' is green with a fish, 'Y' is brown with a yak, and 'Z' is black and white with a zebra.


ENGLISH

1. Collect five advertisement of Indian brands from newspaper/magazine and paste them on A3 size sheet, in the form of a collage.
2. Pick out any two words from the newspaper everyday. Write their meanings and make sentences of your own in separate notebook.
3. Make a model on the following topic:
 - (a) Attire of the people of Andaman and Nicobar Island (Roll no. 1 to 20)
 - (b) Home decor item related to the art and culture of Lakshadweep Island (Roll no.21 onwards)
4. Make a project on Darjeeling based on your reading of chapter:04 (MCB) focusing on Culture, Tourists Attraction and Food of the region by few lines and pasting pictures related to the same in A4 size sheet.

5. Make a working model on the following topics:

- Prepositions (Roll no. 1 to 20)
- Adjectives (Roll no. 21 onwards).

(You may refer to the given images and also use your own imaginative ideas.)



6. Do the following worksheets in your English notebook.

7. Revise and learn the P.A 1 syllabus.



LITERATURE WORKSHEET 04 –

Read the stanza and answers the questions:

1. My notebook, scrawled with observations and anecdotes from the field, has been worn soft by the journey.

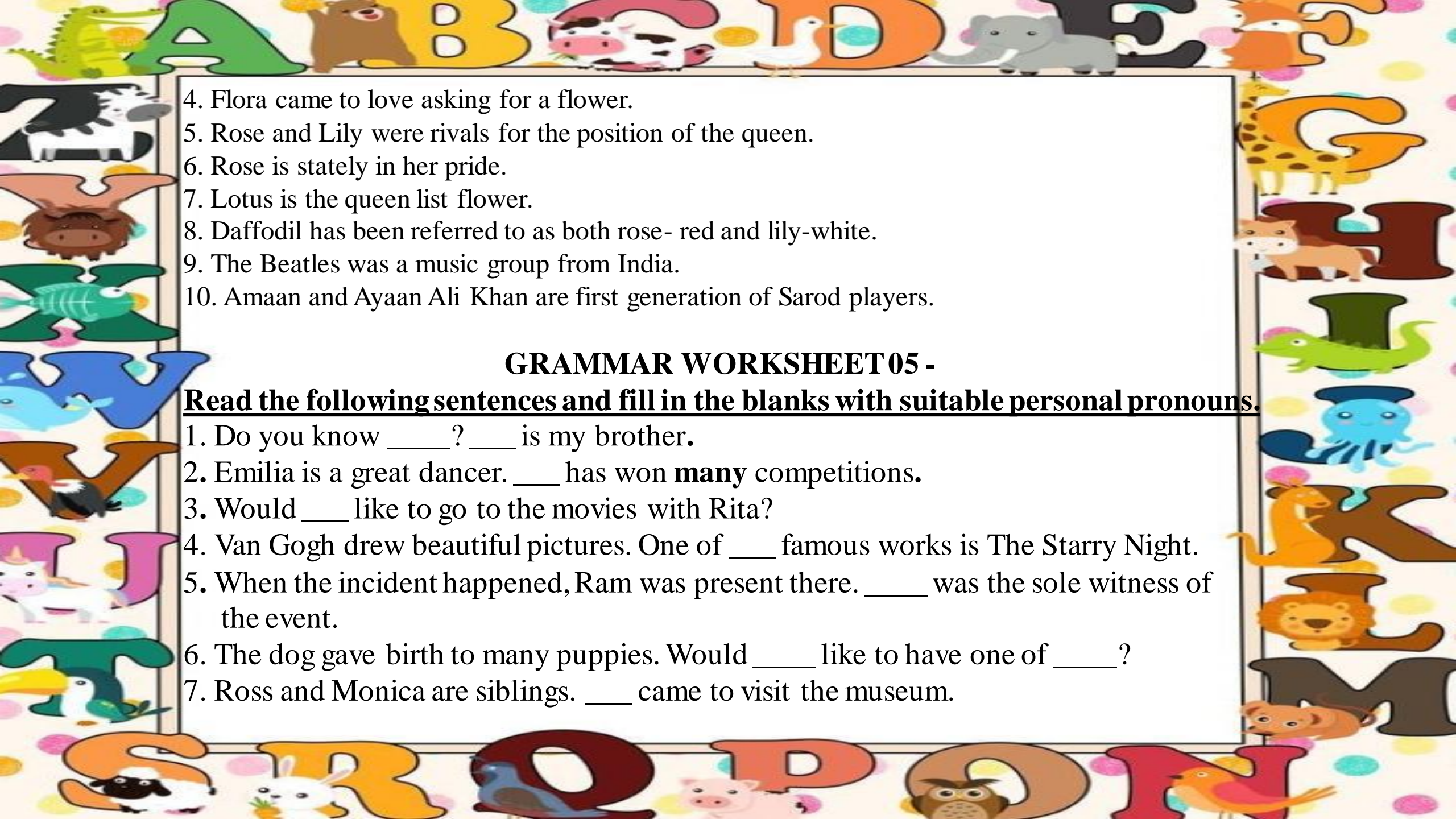
- a. Whose notebook is being talked about in the above line?
- b. Why did this person take her diary there?
- c. What does the author mean by the phrase ‘has been worn soft by the journey’?

2. Life took a twist for me at this very formal Army dinner.

- a. How did the narrator end up at the army dinner?
- b. What ‘twist’ is the narrator talking about?
- c. What significance does this event hold for her?

State whether the following are true or false:

1. Rachel Thomas was terrified while waiting for the jump master’s signal.
2. Rachel was a skydiver’s wife.
3. Mrs Chantal Singh was a qualified instructor for aero sports.

- 
4. Flora came to love asking for a flower.
 5. Rose and Lily were rivals for the position of the queen.
 6. Rose is stately in her pride.
 7. Lotus is the queen list flower.
 8. Daffodil has been referred to as both rose- red and lily-white.
 9. The Beatles was a music group from India.
 10. Amaan and Ayaan Ali Khan are first generation of Sarod players.

GRAMMAR WORKSHEET 05 -

Read the following sentences and fill in the blanks with suitable personal pronouns.

1. Do you know ____? ____ is my brother.
2. Emilia is a great dancer. ____ has won **many** competitions.
3. Would ____ like to go to the movies with Rita?
4. Van Gogh drew beautiful pictures. One of ____ famous works is The Starry Night.
5. When the incident happened, Ram was present there. ____ was the sole witness of the event.
6. The dog gave birth to many puppies. Would ____ like to have one of ____?
7. Ross and Monica are siblings. ____ came to visit the museum.



8. This is Elizabeth. ___ is the class monitor.

9. The team won the match. ___ played surprisingly well.

10. My brother brought a new phone, but ___ doesn't like ___ much.

D. Choose the correct pronoun and use it in the sentence.

1. (Me/I) feel like taking a short trip to the Maldives

2. (I/me) think you should participate in the debate.

3. Wuthering Heights is (her/hers) favourite book.

4. Those papers are (mine/my).

5. The box was lying around. Is (it/its) yours?

6. The dog almost choked (himself/itself).

7. (That/this) book lying here is mine.

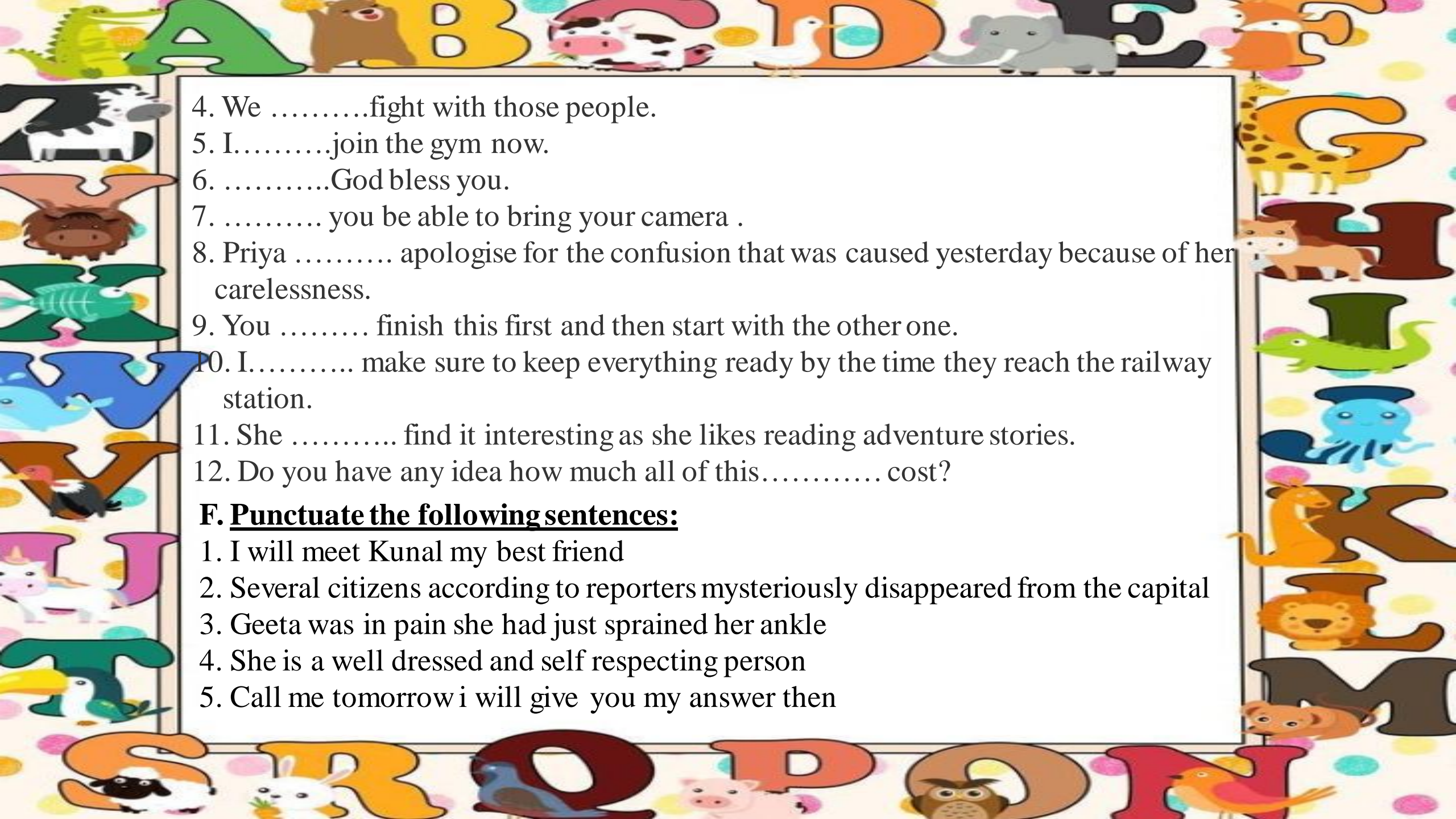
8. (Each/neither) of us were given a gift hamper.

E. Fill in the blanks with suitable modals:

1.I come in, Ma'am?

2.you like to join me for dinner?

3. He.....pay the bill for sure.

- 
4. Wefight with those people.
 5. I.....join the gym now.
 6.God bless you.
 7. you be able to bring your camera .
 8. Priya apologise for the confusion that was caused yesterday because of her carelessness.
 9. You finish this first and then start with the other one.
 10. I..... make sure to keep everything ready by the time they reach the railway station.
 11. She find it interesting as she likes reading adventure stories.
 12. Do you have any idea how much all of this..... cost?

F. Punctuate the following sentences:

1. I will meet Kunal my best friend
2. Several citizens according to reporters mysteriously disappeared from the capital
3. Geeta was in pain she had just sprained her ankle
4. She is a well dressed and self respecting person
5. Call me tomorrow i will give you my answer then

6. The teacher had thirty two children in her classroom
7. The mother said she sings beautifully doesnt she
8. Mrs seema said my son in law brought me a new dress
9. I dont care she said what you think about it
10. Rashmi who is from agra is sitting next to you

G. Study the picture given below. Write a story or description on an account to what it suggests to you



SCIENCE

Instructions:

- Do all the holiday homework questions in the activity file.
- Complete your science Q/A and worksheets and learn it.

Q.1. Write a short biography on Alexander Fleming and highlight his contribution towards 'Penicillin'.

Q.2. Read the passage and answer the given questions.

Sonu's father is a farmer. He uses pesticides and insecticides in his field. One day advised his father to use bio pesticides and bio fertilisers in his field. As pesticides contains harmful chemicals, they can degrade the environment.

1. What are bio pesticides? Name any two bio pesticides.
2. Why are bio pesticides and bio fertilisers better than chemical pesticides?



Q.3. Sink or Float Experiment with oranges and water. Perform this activity in guidance of your parents.

- **Materials required:** Oranges – 2, Glass container – 2, Water

- **Steps to follow:**

1. Fill water in both the glasses.
2. Keep both glasses side by side.
3. Put the unpeeled orange in first glass and peeled orange in second glass.
4. Write your observation and conclusion.

Q.4. Prepare a report on ‘Pulse Polio Programme in India’ and its success.

Q.5. Answer the following questions:

1. If you are given a dry piece of land for cultivation, what will you do before sowing the seeds?
2. Why does curd set faster in summers than in winters?
3. Why it is not advisable to burn plastic?
4. Can we store lemon pickle in an aluminium container?
5. Your mom went to the market to buy a blanket. The shopkeeper showed her blankets made up of acrylic fibres as well as made up of wool. She preferred to buy an acrylic blanket. Can you guess why?



SOCIAL SCIENCE

- 1.Revise PA-1 Syllabus.
- 2.Revise worksheet 1 and 2
- 3.Prepare a PowerPoint Presentation on the topic of :

Disaster Management:

- Types of Disasters
- Preparedness and Mitigation
- Response and Recovery
- Technology in Disaster Management
- International Cooperation
- Socio-economic Impact
- Case Studies

Remember to take out a printout of the PowerPoint presentation and ensure it's ready for submission when we resume classes.



4. Gather details on renowned Indian historians from the internet, compose a bio, and attach their image to a chart paper.
5. Complete the worksheet-3 in your Practice notebook.

WORKSHEET-3

● **FILL IN THE BLANKS:-**

1. History as a science is a _____ arrangements of events.
2. At the end of 19th century, the British organised _____ after every ten years.
3. Under the _____ of 1773, a new Supreme Court was established.
4. _____ was the Governor-General from 1773 to 1785.
5. Wildlife is a _____ resource.
6. Protection of resources is very much essential to conserve them before they get _____.



7. There are elected representatives who make laws in _____
8. _____ assures the dignity of the individual and the unity, and integrity of the Nation.
9. Sati prevention Act was passed in _____.
10. Draft of the constitution was passed on _____.

ANSWER THE FOLLOWING QUESTIONS:

1. What do you understand by the system of ‘Subsidiary Alliance’?
2. Explain the role played by the newspapers during the British Rule.
3. Why are the people of a nation considered as assets?
4. What is a secular state?

USE YOUR OWN CREATIVITY:-

- **Read about the steps taken by the government to uplift the economically weaker and socially backward sections of the society. Do you think this is enough to bring them in the main stream? Why/Why not?**

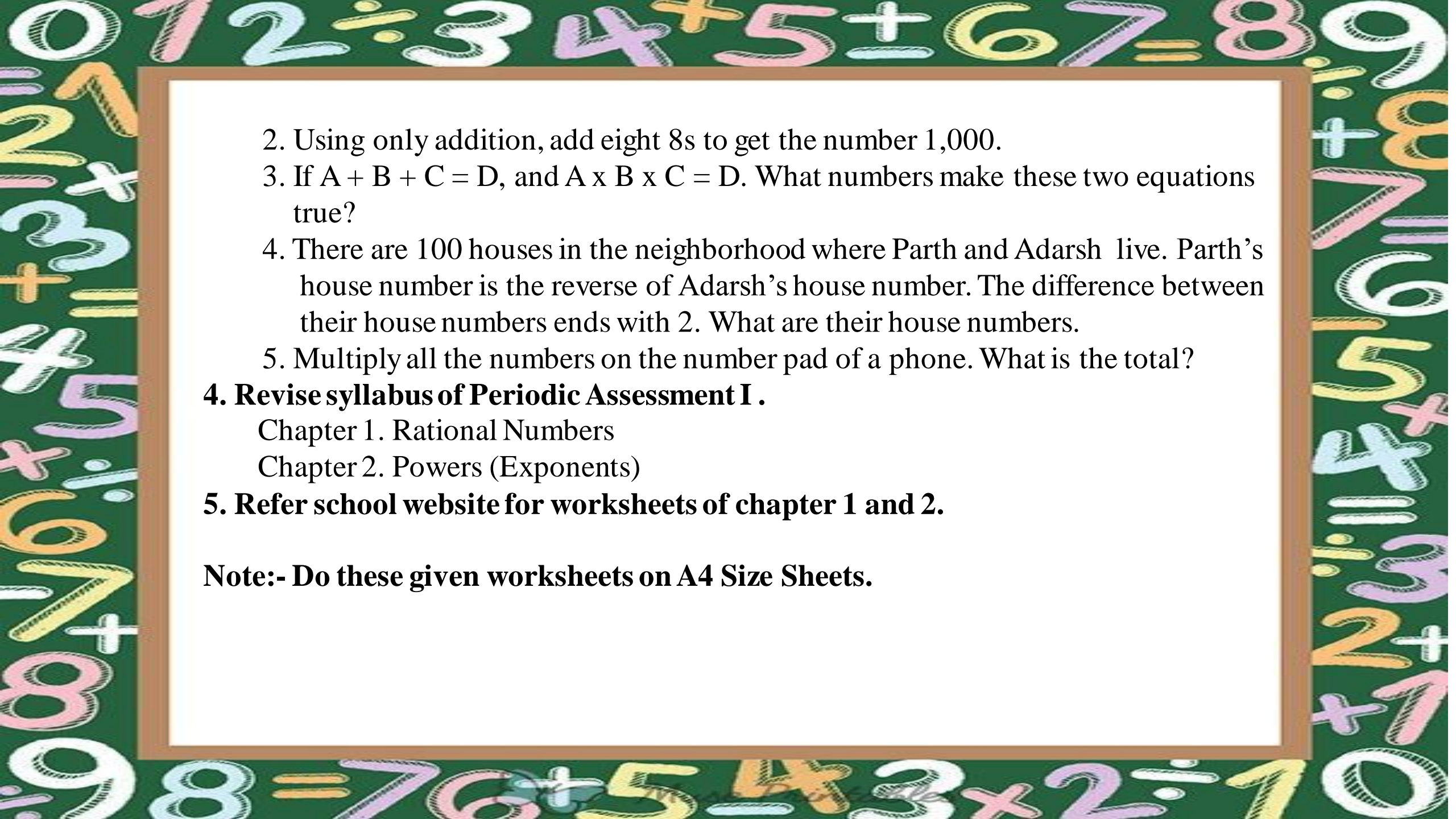


MATHS

- 1. Activity:** To make a paper die using paper net of a cube and to observe the occurrence of different outcomes 1, 2, 3, 4, 5, 6 appearing on its top face when thrown 100 times. (Do this Activity on A4-size sheet)
(For help, you may refer the given link: <https://www.studiestoday.com/download-book/cbse-class-8-maths-activity-6-211873.html>)
- 2. Project:** Make a project on properties of Rational Number. (Closure, Commutative, Associative, Distributive etc. You may refer YouTube videos for reference).
- 3. BRAIN-TEASERS** (To be done on A4 size sheets)

1. Solve the given Puzzle

$$\begin{array}{l} \text{Apple} \times \text{Apple} \times \text{Apple} = 27 \\ \text{Apple} \times \text{Lemon} \times \text{Lemon} \times \text{Lemon} = 24 \\ \text{Apple} \times \text{Lemon} \times \text{Orange} \times \text{Orange} = 96 \\ \text{Orange} + \text{Apple} \times \text{Lemon} = ? \end{array}$$

- 
2. Using only addition, add eight 8s to get the number 1,000.
 3. If $A + B + C = D$, and $A \times B \times C = D$. What numbers make these two equations true?
 4. There are 100 houses in the neighborhood where Parth and Adarsh live. Parth's house number is the reverse of Adarsh's house number. The difference between their house numbers ends with 2. What are their house numbers.
 5. Multiply all the numbers on the number pad of a phone. What is the total?

4. Revise syllabus of Periodic Assessment I .

Chapter 1. Rational Numbers

Chapter 2. Powers (Exponents)

5. Refer school website for worksheets of chapter 1 and 2.

Note:- Do these given worksheets on A4 Size Sheets.

COMPUTER

Practical Activity:

Activity 1:

- Surf the internet and find out the various types of networks and how they work.

Activity 2:

- Surf the internet and write a paragraph on “**Advantages of Using The Internet**”.

General Questions:

1. Identify the following terms:

1. A global network of millions of computers and computer networks all over the world. _____
2. A computer network that spans across a city. _____
3. Technology that enables wireless communication within a short range. _____
4. Tool that is used to detect edges of an image automatically. _____
5. Tool that is used to type text on the image or workspace. _____

B. Identify the tool and write its use:

1. 
2. 
3. 
4. 

C. Competency-based questions:

1. Sonia has opened a file in Krita. She wants to duplicate some parts of the image. Suggest the tool which will do the job.
2. Sumit wants to set up a network for his organisation. He wants to use a topology in which all nodes are connected in a circular path. Suggest which topology he should choose.

- **Note:** Do this homework in A4 size sheets and keep them in a folder.
- Learn Chapter 1 and 2 for PA-1.

संस्कृतम

प्रश्न-1) देव , लता , साधु , मुनि, किम् (तीनों लिंगों में) शब्द रूप लिखिए तथा याद कीजिए ।

प्रश्न-2) नम् , दृश् , गम् , पा (पिब्), पच् धातु रूप (लट् , लृट् , लंग , लोट् , विधिलिङ्) पांचो लकार में लिखिए तथा याद कीजिए।

प्रश्न-3) 1 - 100 तक संख्या लिखिए तथा याद कीजिए।

प्रश्न - 4) 'गीता' विषय पर पांच श्लोक लिखिए तथा याद कीजिए।

प्रश्न-5) अपठित गद्यांश 1 - 4 तक कीजिए।

प्रश्न-6) पाठ्य पुस्तक के पाठ 1 से 3 तक याद कीजिए।

नोट : 1. प्रश्न 1,2,3 तथा 4 उत्तर पुस्तिका (Notebook) में कीजिए ।
2. प्रश्न 5 व्याकरण पुस्तक में कीजिए।

FRENCH

Revise leçon 1 to 2

Q1 Mettez l'adjectif à la forme convenable.

1. Les chats sont _____ (joli)
2. Sophie est _____ (blond)
3. La maison est _____ (grand)
4. Elle est _____ (belle)
5. Elle est _____ (vieux)

Q2 Mettez au pluriel.(Change into plural)

1. La table est basse
2. J'ai un chien allemand
3. Je vais et Elle va
4. Tu finis le chocolate
5. C'est un journal

Q3 Mettez au négatif.

1. Vous avez 33 ans
2. Il fait chaud
3. Ils voyagent beaucoup
4. Elle finit le travail
5. Nous sommes intelligents.

Q4 Faites des phrases.

1. Combine de
2. Plus de
3. Beaucoup de

Q5 Conjuguez les verbes.

1. Nager
2. Sortir
3. Appeler
4. Faire
5. Voir

Q6 Remplissez les blanc.

1. La tour Eiffel est construite en _____ par _____
2. Deux peintres français _____ et _____
3. Le Sacré Coeur est situé sur la colline _____
4. _____ est un musée d'art moderne.
5. Deux oeuvres qu'on trouve au Louvre _____
6. On trouve une collection des statues de cire au _____
7. La tour Eiffel mesure _____

Q7 Make any one monuments of France on A3 size sheet.

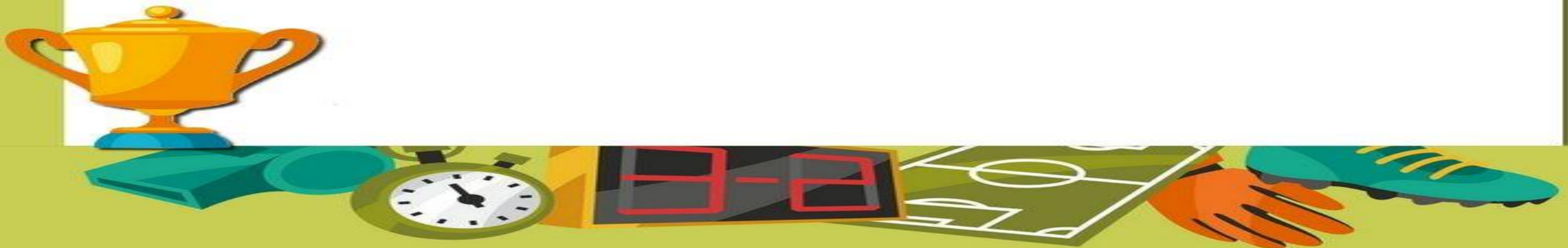
Q8 Read and Revise, All the chapters that we have done so far in the class, pick out the difficult words from each chapters and write it down in your notebook and try to find out their translation as well.

Q9 Cover your French notebook with a “Red” coloured chart/handmade sheet/pastel sheet and paste pics on it related to French culture.



GENERAL KNOWLEDGE

- Collect 20 current affairs from May to June.
- Complete Unit 1 and & Unit 2



ART

Do page no. **11** to **40**

File - complete April & May month syllabus.

Craft

1. Make a beautiful tote cloth bag with Acrylic/Fabric color as per drawing book page no. 50.
2. Make a 3D greeting card on Father's Day.





HAPPY HOLIDAYS!!!!